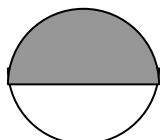


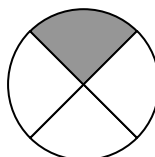
N12. Relations entre les nombres décimaux et les fractions

Il faut connaître par cœur certaines égalités entre des fractions et des nombres décimaux.

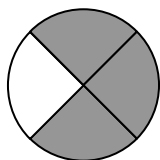
$$\frac{1}{2} = 0,5$$




$$\frac{1}{4} = 0,25$$




$$\frac{3}{4} = 0,75$$



$$\frac{1}{10} = 0,1$$



$$\frac{3}{10} = 0,3$$



$$\frac{1}{100} = 0,01$$

